



Maria's Piggy Bank

1. Maria's piggy bank fell off her desk and broke! There are pennies, nickels and dimes everywhere. Maria needs 25 cents to buy ice cream. What coins could she use to pay the 25 cents? Show your answer using pictures, numbers and words.




2 dimes and 5 pennies

2. Show a different combination of coins that Maria could use.




3. Are there other ways to make 25cents? _____
Show the other ways that you can make 25 cents.

~~1 nickel and~~






2112113



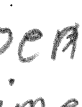


Maria's Piggy Bank

1. Maria's piggy bank fell off her desk and broke! There are pennies, nickels and dimes everywhere. Maria needs 25 cents to buy ice cream. What coins could she use to pay the 25 cents? Show your answer using pictures, numbers and words.




 $10 + 10 + 5 = 25$

2. Show a different combination of coins that Maria could use.




 $10 \text{ pennies} + 1 \text{ dime} + 1 \text{ nickel} = 25$


3. Are there other ways to make 25 cents? yes

Show the other ways that you can make 25 cents.



3

2-12-13

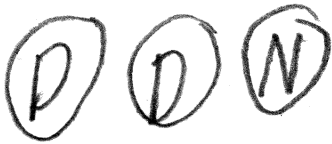


Maria's Piggy Bank


1. Maria's piggy bank fell off her desk and broke! There are pennies, nickels and dimes everywhere. Maria needs 25 cents to buy ice cream. What coins could she use to pay the 25 cents? Show your answer using pictures, numbers and words.




2. Show a different combination of coins that Maria could use.



3. Are there other ways to make 25cents? _____
Show the other ways that you can make 25 cents.





Maria's Piggy Bank


1. Maria's piggy bank fell off her desk and broke! There are pennies, nickels and dimes everywhere. Maria needs 25 cents to buy ice cream. What coins could she use to pay the 25 cents? Show your answer using pictures, numbers and words.

Maria should use ~~two~~ one nickel and two dimes

2. Show a different combination of coins that Maria could use.




3. Are there other ways to make 25cents? _____
Show the other ways that you can make 25 cents.



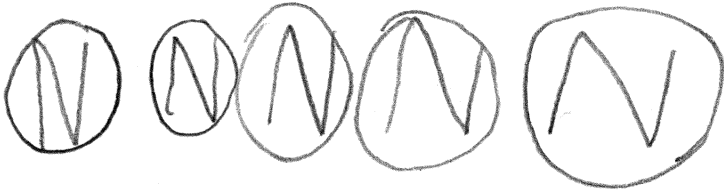
2/12/13

Maria's Piggy Bank

1. Maria's piggy bank fell off her desk and broke! There are pennies, nickels and dimes everywhere. Maria needs 25 cents to buy ice cream. What coins could she use to pay the 25 cents? Show your answer using pictures, numbers and words.




2. Show a different combination of coins that Maria could use.




3. Are there other ways to make 25cents? 25¢
Show the other ways that you can make 25 cents.





Maria's Piggy Bank

1. Maria's piggy bank fell off her desk and broke! There are pennies, nickels and dimes everywhere. Maria needs 25 cents to buy ice cream. What coins could she use to pay the 25 cents? Show your answer using pictures, numbers and words.





~~N~~ $10 + 10 + 5 = 25$


2. Show a different combination of coins that Maria could use.

$5 + 5 + 5 + 5 + 5 = 25$

3. Are there other ways to make 25 cents? _____
Show the other ways that you can make 25 cents.




$1 + 1 + 1 + 1 + 1 + 1 + 1 + 1 + 1 + 1 + 1 + 5 = 25$



Maria's Piggy Bank

1. Maria's piggy bank fell off her desk and broke! There are pennies, nickels and dimes everywhere. Maria needs 25 cents to buy ice cream. What coins could she use to pay the 25 cents? Show your answer using pictures, numbers and words.



2. Show a different combination of coins that Maria could use.


fix it

3. Are there other ways to make 25cents? _____
Show the other ways that you can make 25 cents.

he n d d d f i x i t
c d h h e c d n
f i x i t

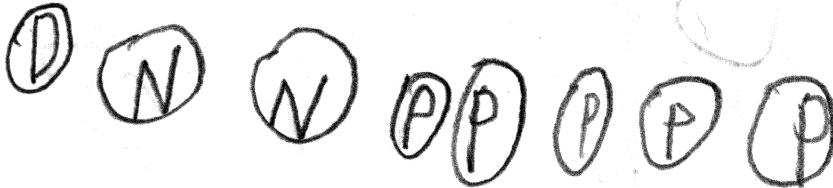
11

2/12/13



Maria's Piggy Bank

1. Maria's piggy bank fell off her desk and broke! There are pennies, nickels and dimes everywhere. Maria needs 25 cents to buy ice cream. What coins could she use to pay the 25 cents? Show your answer using pictures, numbers and words.




2. Show a different combination of coins that Maria could use.




3. Are there other ways to make 25cents?

Yes

Show the other ways that you can make 25 cents.



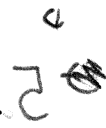


Maria's Piggy Bank


1. Maria's piggy bank fell off her desk and broke! There are pennies, nickels and dimes everywhere. Maria needs 25 cents to buy ice cream. What coins could she use to pay the 25 cents? Show your answer using pictures, numbers and words.



2. Show a different combination of coins that Maria could use.



3. Are there other ways to make 25 cents? 20000
Show the other ways that you can make 25 cents.




13

Maria's Piggy Bank

~~2~~ 2 1 3 1 3

1. Maria's piggy bank fell off her desk and broke! There are pennies, nickels and dimes everywhere. Maria needs 25 cents to buy ice cream. What coins could she use to pay the 25 cents? Show your answer using pictures, numbers and words.



2. Show a different combination of coins that Maria could use.



3. Are there other ways to make 25cents? Show the other ways that you can make 25 cents.


~~20c + 5c = 25c~~

~~20 + 5 = 25~~

20c + 5c = 25c

14

2/12/13



Maria's Piggy Bank

1. Maria's piggy bank fell off her desk and broke! There are pennies, nickels and dimes everywhere. Maria needs 25 cents to buy ice cream. What coins could she use to pay the 25 cents? Show your answer using pictures, numbers and words.


$$11 + 11 + 25$$

2. Show a different combination of coins that Maria could use.

$$22 + 11 = 25$$


3. Are there other ways to make 25cents? _____
Show the other ways that you can make 25 cents.

$$23 + 11 = 25$$



Maria's Piggy Bank


1. Maria's piggy bank fell off her desk and broke! There are pennies, nickels and dimes everywhere. Maria needs 25 cents to buy ice cream. What coins could she use to pay the 25 cents? Show your answer using pictures, numbers and words.



$$10 + 10 + 5 = 25$$

10 cents and 10 cents and 5 cents.

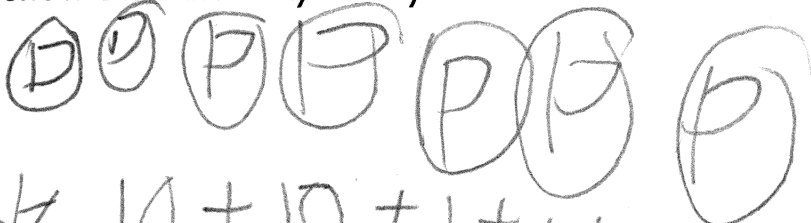
2. Show a different combination of coins that Maria could use.




$$5 + 5 + 5 + 5 + 5 = 25$$

3. Are there other ways to make 25 cents? _____

Show the other ways that you can make 25 cents.



$$10 + 10 + 1 + 1 + 1 + 1 + 1 = 25$$

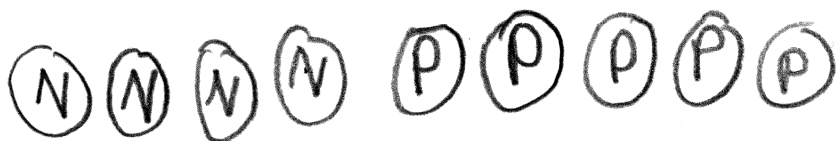


18

2/2/13

Maria's Piggy Bank

1. Maria's piggy bank fell off her desk and broke! There are pennies, nickels and dimes everywhere. Maria needs 25 cents to buy ice cream. What coins could she use to pay the 25 cents? Show your answer using pictures, numbers and words.



For nickels and 5 pennies.

$$20 + 5 = 25$$

$$20 + 5 = 25$$

2. Show a different combination of coins that Maria could use.

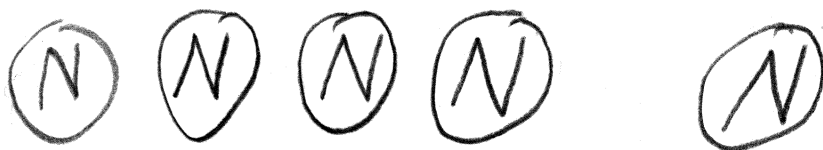


$$20 + 5 = 25$$


* Two dimes and one nickel.

3. Are there other ways to make 25cents? ~~no~~ yes

Show the other ways that you can make 25 cents.



$$20 + 5 = 25$$



19

2/12/13

Maria's Piggy Bank

1. Maria's piggy bank fell off her desk and broke! There are pennies, nickels and dimes everywhere. Maria needs 25 cents to buy ice cream. What coins could she use to pay the 25 cents? Show your answer using pictures, numbers and words.

10 10 ~~5~~

Ten cents and ten cents.

2. Show a different combination of coins that Maria could use.


~~10~~ x 5 5 5 5

Five ~~10~~ cents and five cents.
and five cents and five cents.

3. Are there other ways to make 25 cents? 10 10 1 1 1 1

Show the other ways that you can make 25 cents.

Ten cents and ten cents and 1 cent and 1 cent and 1 cent and 1 cent.

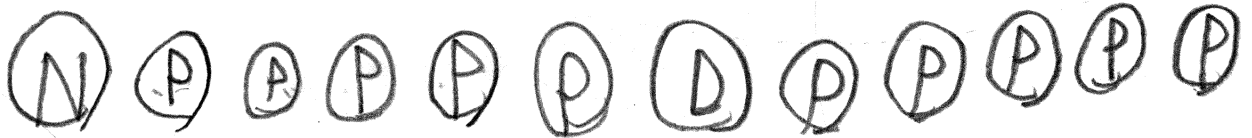


Maria's Piggy Bank

1. Maria's piggy bank fell off her desk and broke! There are pennies, nickels and dimes everywhere. Maria needs 25 cents to buy ice cream. What coins could she use to pay the 25 cents? Show your answer using pictures, numbers and words.




2. Show a different combination of coins that Maria could use.



3. Are there other ways to make 25cents?
Show the other ways that you can make 25 cents.


~~$5 + 5 + 10 + 1 + 1 + 3 =$~~

$10 + 15 = 25$



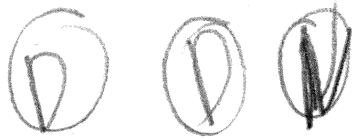
21

2/12/13



Maria's Piggy Bank

1. Maria's piggy bank fell off her desk and broke! There are pennies, nickels and dimes everywhere. Maria needs 25 cents to buy ice cream. What coins could she use to pay the 25 cents? Show your answer using pictures, numbers and words.



$$20 + 5 = 25$$


2. Show a different combination of coins that Maria could use.



3. Are there other ways to make 25cents? yes

Show the other ways that you can make 25 cents.

1	2	3	4	5	6	7	8	9	10	11	12	13	14	15
16	17	18	19	20	21	22	23	24	25					



22

Maria's Piggy Bank

2 11 2 13

1. Maria's piggy bank fell off her desk and broke! There are pennies, nickels and dimes everywhere. Maria needs 25 cents to buy ice cream. What coins could she use to pay the 25 cents? Show your answer using pictures, numbers and words.

N N N N N 5 10 15 20 25

I use the nickels.

2. Show a different combination of coins that Maria could use.

10 20 25

D D N

~~I use the~~

I use nickels and dimes.

3. Are there other ways to make 25 cents? yes
Show the other ways that you can make 25 cents.

~~P P P P P~~

$$1 - 26 = 25$$

$$30 - 5 = 25$$

$$24 + 1 = 25$$